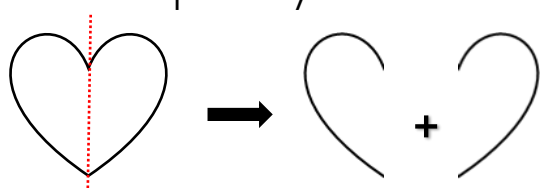




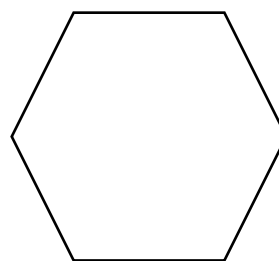
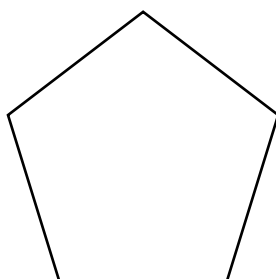
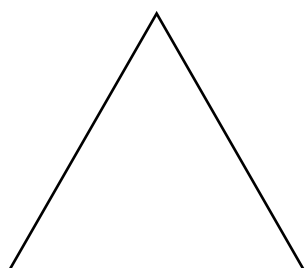
SIMMETRIE

ONTHOU !

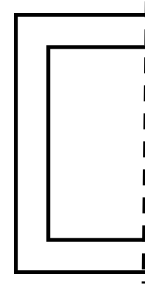


Simmetrie is as jy 'n voorwerp presies in die helfte kan deel en altwee dele lyk presies dieselfde. Party vorms het meer as een simmetrielyn. Voorbeeld:



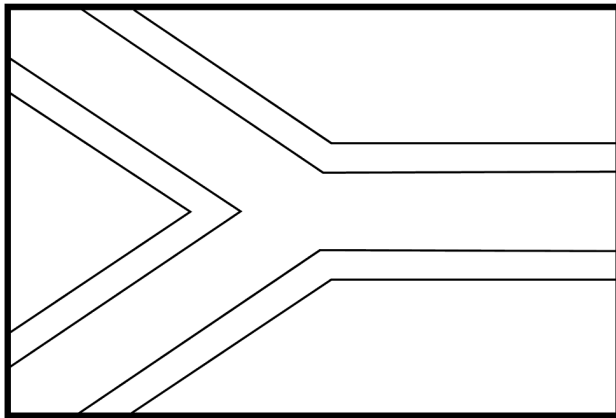
1. Teken die simmetrielyn van die volgende vorms en skryf hoeveel simmetrielyne die vorm het in die blokkie neer.





2. Teken die ander helfte van die volgende prente



3. Verdeel die Suid-Afrikaanse landsvlag simmetries

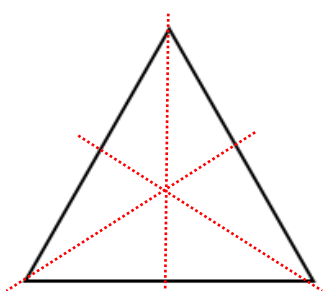


4. Watter en van die skoenlappers hieronder is simmetries? Omkring die regte een.

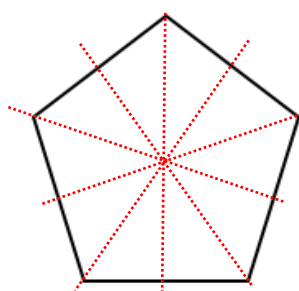


ANTWOORDE

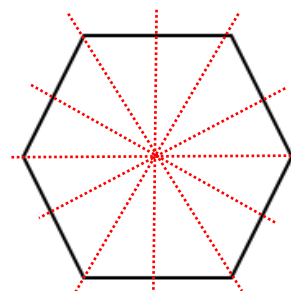
1. Teken die simmetrielyne van die volgende vorms en skryf hoeveel simmetrielyne die vorm het in die blokkie neer.



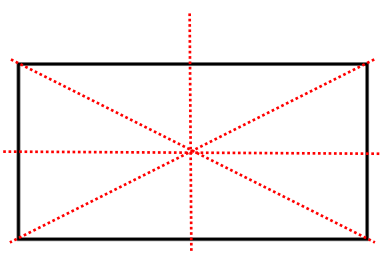
3



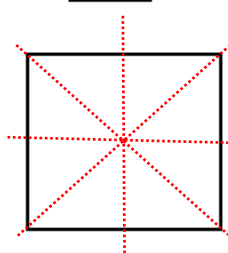
5



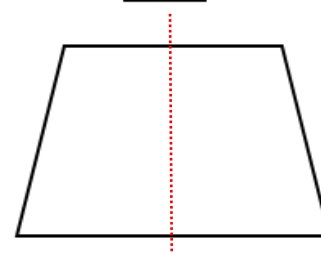
6



4

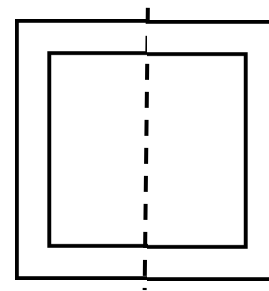
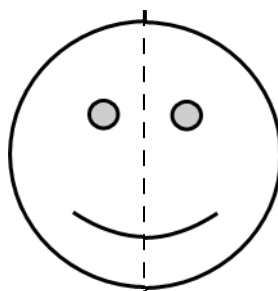
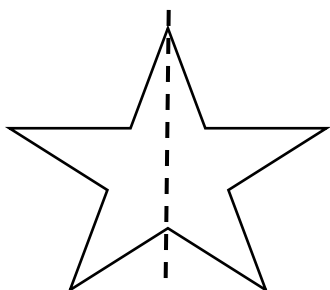


4

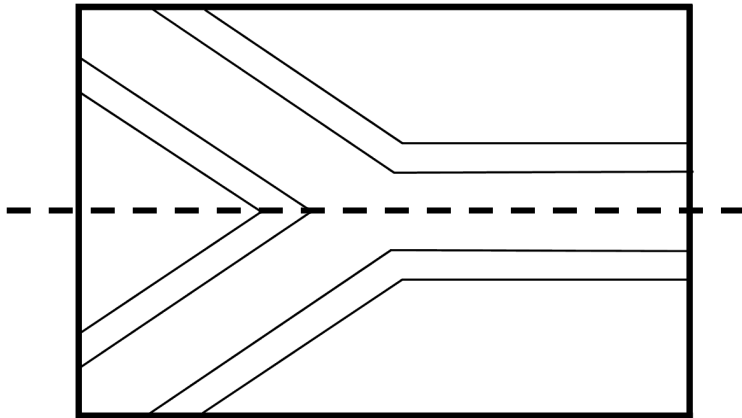


1

2. Teken die ander helfte van die volgende prente



3. Verdeel die Suid-Afrikaanse landsvlag simmetries



4. Watter en van die skoenlappers hieronder is simmetries? Omkring die regte een.

