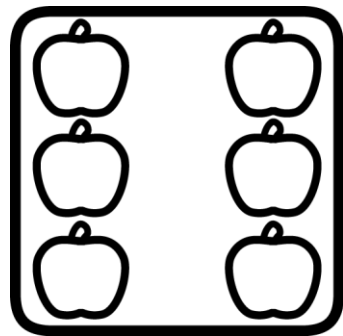




Number of the day


1 - 10




Name:

Number of the day

Write the number name



How many
apples do you
count?



even number

uneven number


2 more than 1

5 more than 1

3 more than 1

Draw 1 apple in the block

Dubble

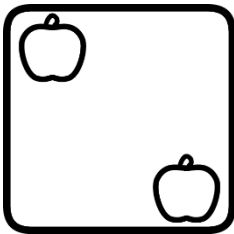


Number of the day

Write the number name



How many
apples do you
count?



even number

uneven number


2 more than 2

1 less than 2

3 more than 2

Draw 2 apples in the blocks

Dubble




Number of the day

Write the number name



How many
apples do you
count?



even number

uneven number


2 more than 3

2 less than 3

3 more than 3


Draw 3 apples in the blocks

Dubble

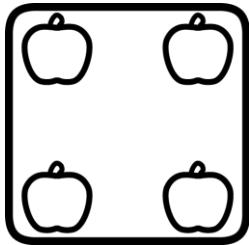


Number of the day

Write the number name



How many
apples do you
count?



even number

uneven number



2 more than 4

2 less than 4

4 more than 4

Draw 4 apples in the blocks

Dubble




Number of the day

Write the number name



How many
apples do you
count?



even number

uneven number



2 more than 5

3 less than 5

5 more than 5


Draw 5 apples in the blocks

Dubble





Number of the day

Write the number name



How many apples
do you count?



even number

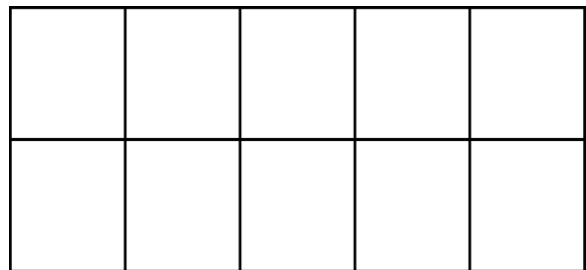
uneven number

3 more than 6

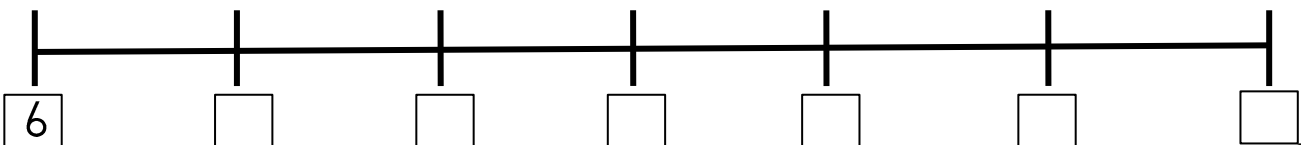
3 less than 6

2 more than 6

Draw 6 apples in the blocks



Count backwards from 6 on the number line

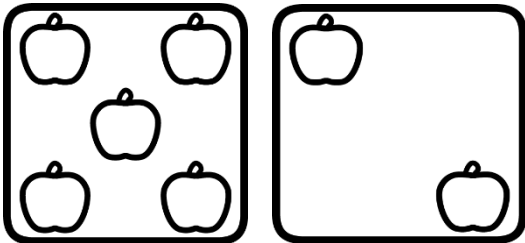


Number of the day

Write the number name



How many apples
do you count?



even number

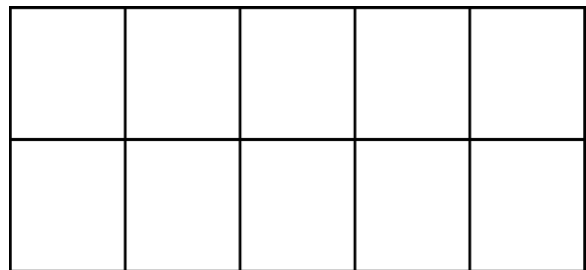
uneven number

3 more than 7

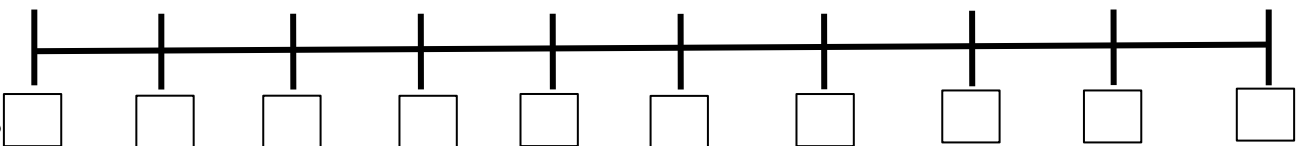
2 less than 7

2 more than 7

Draw 7 apples in the blocks




Count till ten and colour the number of the day




Number of the day

Write the number name



How many apples
do you count?



even number

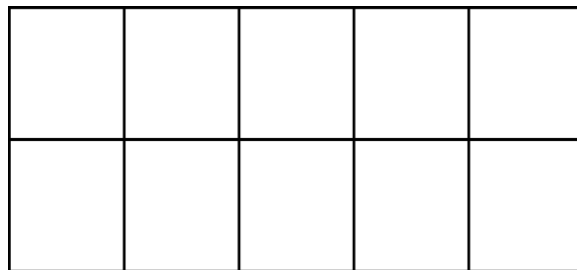
uneven number

3 less than 8

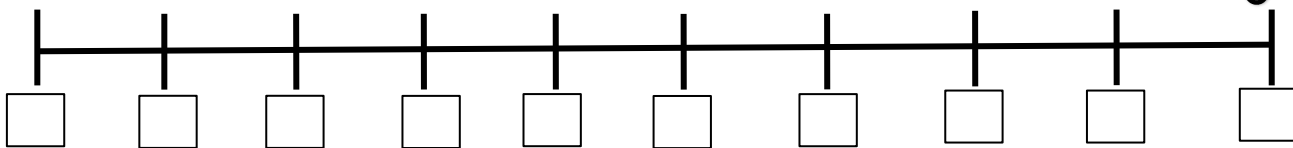
5 less than 8

2 more than 8

Draw 8 apples in the blocks




Count till ten and colour the number of the day




Number of the day

Write the number name



How many apples
do you count?



even number

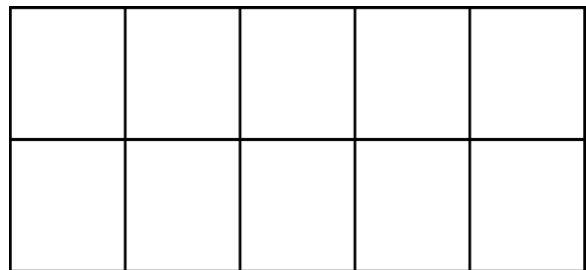
uneven number

5 less than 9

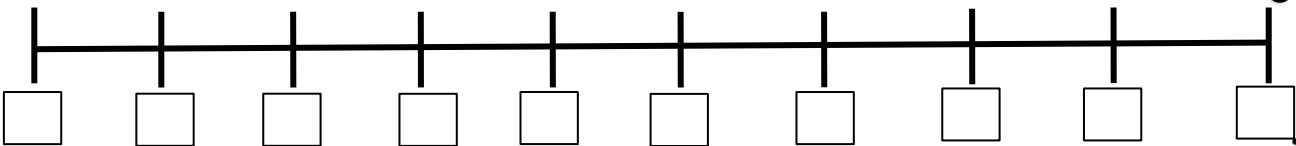
4 less than 9

1 more than 9

Draw 9 apples in the blocks




Count till ten and colour the number of the day

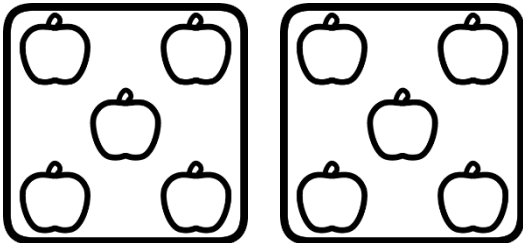


Number of the day

Write the number name



How many apples
do you count?



even number

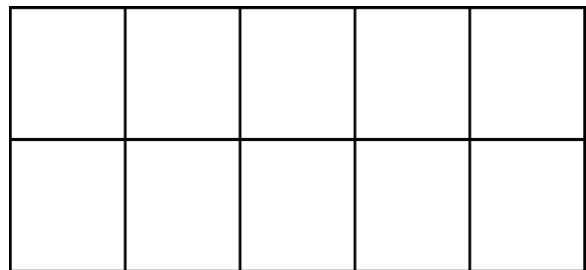
uneven number

2 less than 10

5 less than 10

7 less than 10

Draw 10 apples in the blocks



Count till ten and colour the number of the day

