



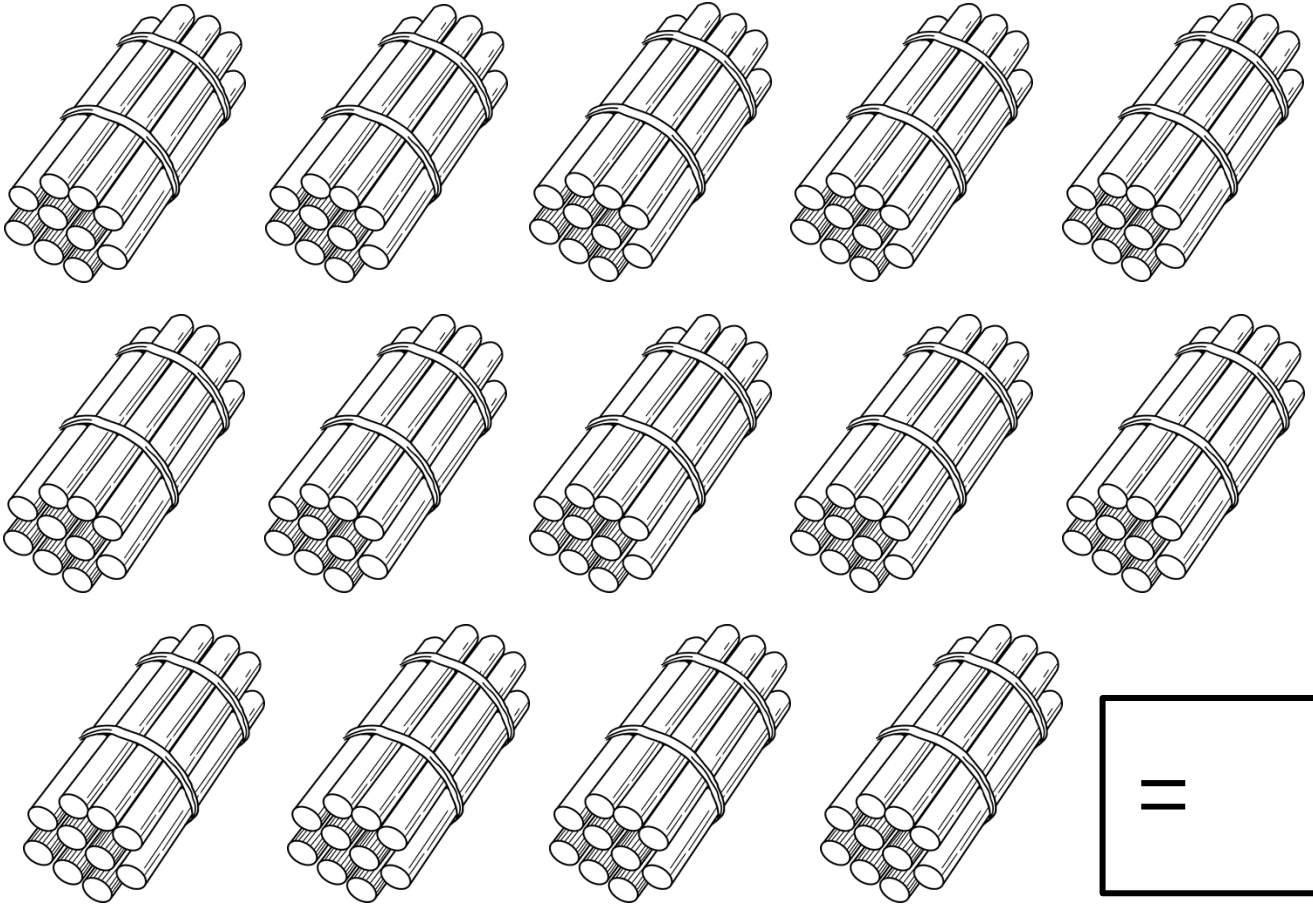
Wiskunde
Graad 3



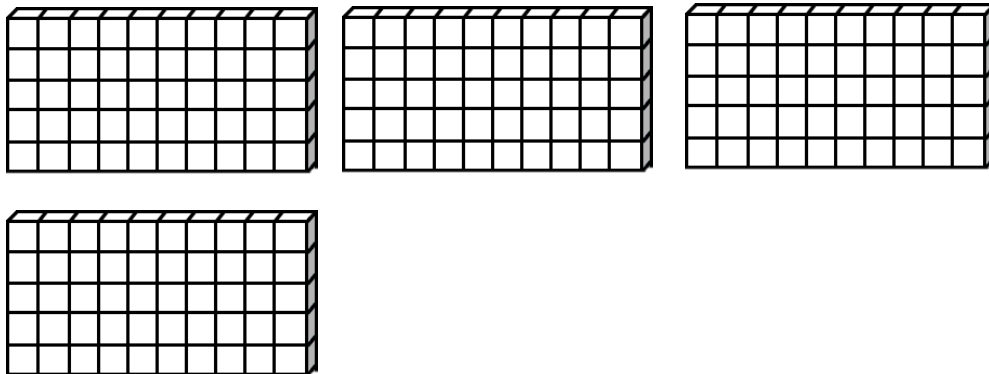
Naam:

Tel tyd!


Tel hoeveel stokkies is hier altesaam in die bondels.
Skryf jou antwoord in die blok neer.




Daar is 50 blokkies in elke blok. Tel hoeveel blokke is daar altesaam.



Spook skatting




Help die spoke om te skat.



1. Hoeveel lekkers skat jy is in een bottel? _____
2. Hoeveel lekkers skat jy is daar altesaam in al die bottels? _____
3. Tel nou hoeveel lekkers is daar altesaam. _____

Voltooi die volgende tabelle deur aan te tel.



299			302				306
-----	--	--	-----	--	--	--	-----


330	340				380	390	
-----	-----	--	--	--	-----	-----	--


		55	60			75	
--	--	----	----	--	--	----	--

55	66				110		
----	----	--	--	--	-----	--	--

	22	24	26				34
--	----	----	----	--	--	--	----

100				500
-----	--	--	--	-----





Voltooi die volgende tabelle deur terug te tel.

	194				198	199	
--	-----	--	--	--	-----	-----	--


330		350				390	400
-----	--	-----	--	--	--	-----	-----

		55	60			75	80
--	--	----	----	--	--	----	----


20			26			32	34
----	--	--	----	--	--	----	----

112	116	120					140
-----	-----	-----	--	--	--	--	-----

500				100
-----	--	--	--	-----



Skryf die getalname en die getalsimbole van die volgende:



100

agt en sewentig

tweehonderd drie en dertig

67


vyf en vyftig

99

58

vyfhonderd

Verbind die getalnaam met sy getalsimbool deur 'n liniaal te gebruik.



500

vierhonderd en veertig

125

tweehonderd en
vyftig

250

driehonderd vyf
en veertig

345

vyfhonderd

440

eenhonderd vyf
en twintig

Meer as en minder as

1 meer as 200 is ___

1 minder as 199 is ___

1 meer as 89 is ___

1 meer as 129 is ___

1 minder as 100 is ___

1 meer as 125 is ___

2 meer as 104 is ___

2 minder as 110 is ___

2 meer as 133 is ___

2 minder as 205 is ___

2 minder as 147 is ___

2 meer as 188 is ___

3 meer as 63 is ___

3 meer as 77 is ___

3 minder as 200 is ___

3 meer as 141 is ___

3 minder as 31 is ___

3 meer as 120 is ___

5 meer as 25 is ___

5 meer as 170 is ___

5 minder as 200 is ___

5 meer as 139 is ___

5 minder as 139 is ___

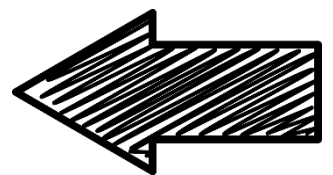
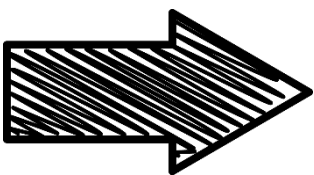
5 meer as 195 is ___

10 meer as 63 is ___







10 meer as 190 is ___

10 minder as 100 is ___

10 meer as 55 is ___




Help die padda om die breuknaam wat ingekleur is neer te skryf.




Besige bye breuke


Kleur 2 kwarte in.




Kleur 1 derde in.




Kleur 2 derdes in.




Kleur 3 kwarte in.



Kleur 2 vyfdes in.



Kleur 3 derdes in.



Plekwaarde

Ontbind die getalle in tiene en ene.

99

tiene

ene

75

tiene

ene

50

tiene

ene

66

tiene

ene

43

tiene


ene

30

tiene

ene

Help vir Lisa om die
optelsomme op die
tablet te doen.




$$69 + 12 = \square$$

$$43 + 36 = \square$$

$$55 + 43 = \square$$



Help vir Ben om die
aftreksomme op
die tablet te doen.



$$89 - 56 = \square$$

$$65 - 34 = \square$$

$$33 - 22 = \square$$



Los die volgende probleme op:



1. Lisa koop vir haar 3 nuwe poppe.
Elke pop kos R90. Hoeveel kleingeld sal sy kry van R400?

Werkspasie


2. Johan spaar elke dag R6.50. Hoeveel het hy na 4 dae gespaar?

Werkspasie

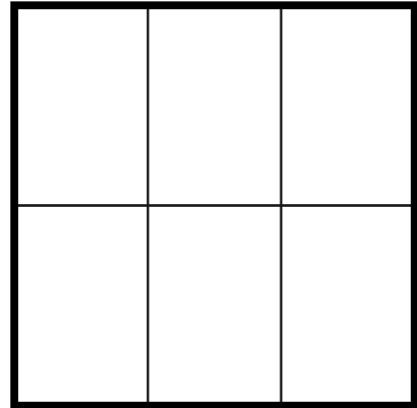
3. As een suiglekker 25c kos, hoeveel sal 15 suiglekkers kos?

Werkspasie

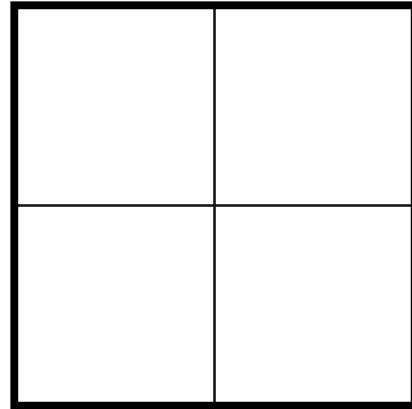

Kleur twee
derdes in.



Kleur vier
sesdes in.



Kleur twee kwarte in op elkeen.



Kleur vier vyfdes in op elkeen.

