



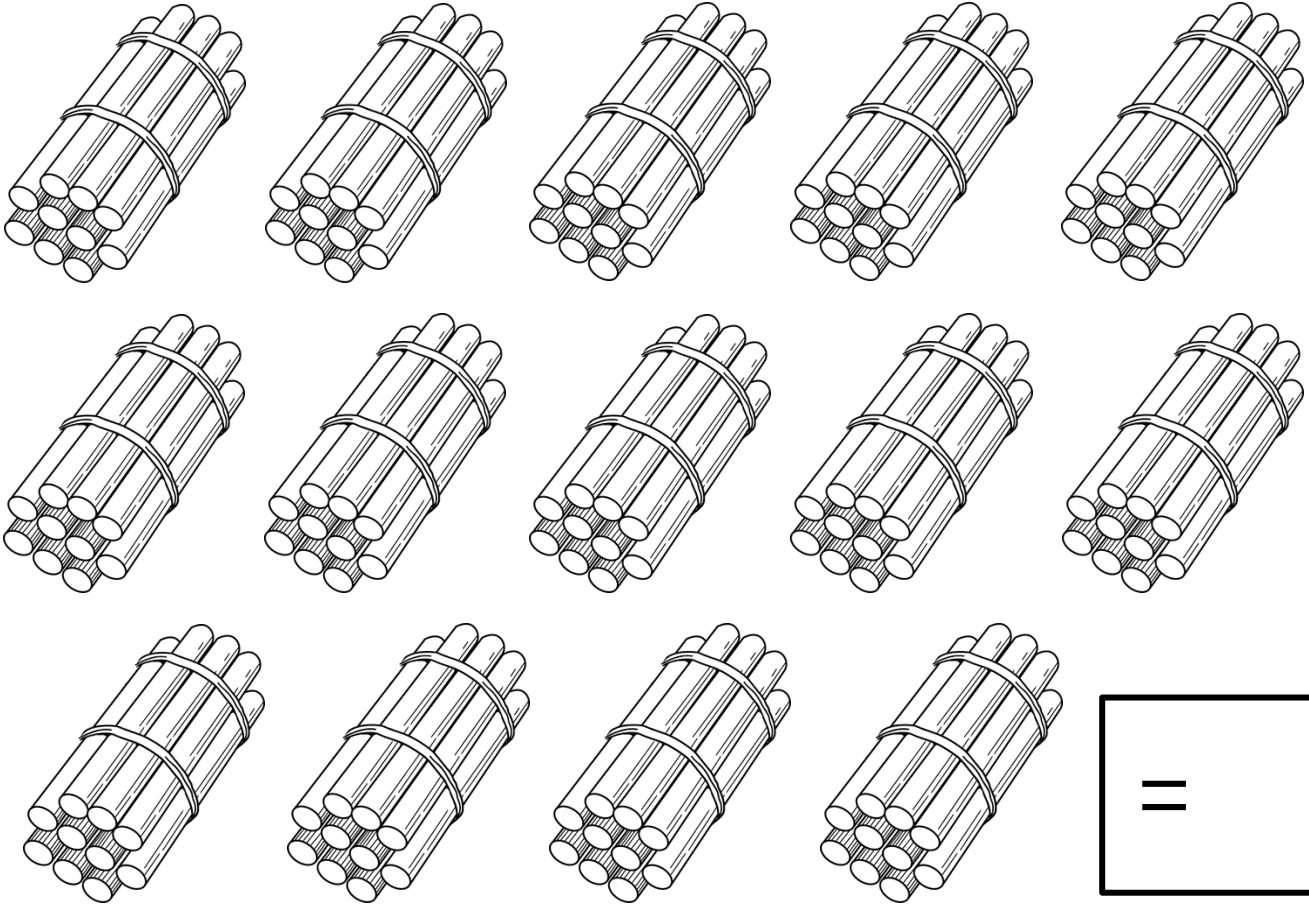
Mathematics
Grade 3



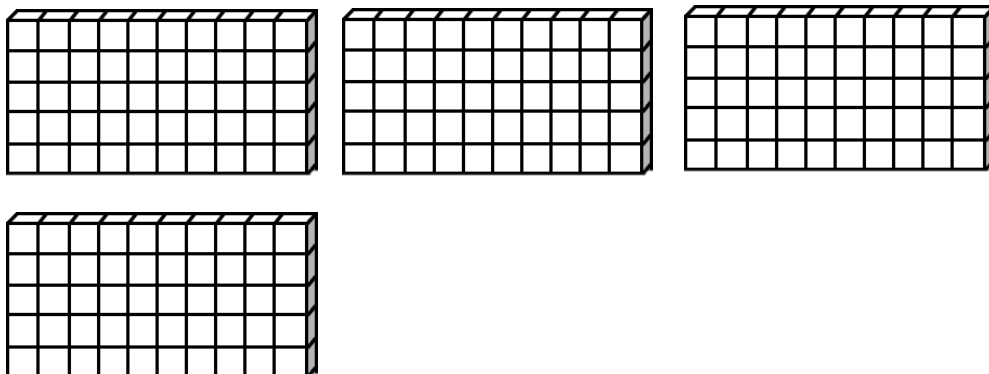
Name:

Time to count!


Count how many sticks there are altogether in the bundles. Write your answer in the block.




There are 50 small blocks in each big block. What is the total amount of blocks?



Ghost predict




Help the ghosts to predict.



1. How many sweets do you predict is in 1 bottle? _____
2. How many sweets do you predict there are in all the bottles together? _____
3. Count the total amount of sweets. _____

Complete the tables by counting forward.



299			302				306
-----	--	--	-----	--	--	--	-----


330	340				380	390	
-----	-----	--	--	--	-----	-----	--


		55	60			75	
--	--	----	----	--	--	----	--

55	66				101		
----	----	--	--	--	-----	--	--

	22	24	26				34
--	----	----	----	--	--	--	----

100				500
-----	--	--	--	-----





Complete the table by counting backward.

	194				298	299	
--	-----	--	--	--	-----	-----	--


330		350				390	400
-----	--	-----	--	--	--	-----	-----

		55	60			75	80
--	--	----	----	--	--	----	----


20			26			32	34
----	--	--	----	--	--	----	----

112	116	120					140
-----	-----	-----	--	--	--	--	-----

500				100
-----	--	--	--	-----



Write the number name and number symbol for the following:



100

seventy-eight

two hundred and thirty-three

67


fifty-five

99

58

five hundred

Connect the number symbol with its number name by using a ruler.



500

four hundred and forty

125

two hundred and
fifty

250

three hundred and
forty-five

345

five hundred

440

two hundred and
twenty-five

More than and less than

1 more than 200 is ___

1 less than 199 is ___

1 more than 89 is ___

1 more than 129 is ___

1 less than 100 is ___

1 more than 125 is ___

2 more than 104 is ___

2 less than 110 is ___

2 more than 133 is ___

2 less than 205 is ___

2 less than 147 is ___

2 more than 188 is ___

3 more than 63 is ___

3 more than 77 is ___

3 less than 200 is ___

3 more than 141 is ___

3 less than 31 is ___

3 more than 120 is ___

5 more than 25 is ___

5 more than 170 is ___

5 less than 200 is ___

5 more than 139 is ___

5 less than 139 is ___

5 more than 195 is ___



10 more than 63 is ___







10 more than 190 is ___

10 less than 100 is ___

10 more than 55 is ___




Help the frog to name the fractions which is colored in.




Busy bee fractions


Color in $\frac{2}{4}$ quarters.




Color in $\frac{1}{3}$ a third.




Color in $\frac{2}{3}$ thirds.




Color in $\frac{3}{4}$ quarters.



Color in $\frac{2}{5}$ fifths.



Color in $\frac{4}{5}$ fifths.



Place value

Break up the numbers in tens and ones.

99	
tens	ones

75	
tens	ones


50	
tens	ones

66	
tens	ones

43	
tens	ones

30	
tens	ones

Help Lisa to complete
the addition sums on
her tablet.




$$69 + 12 = \square$$

$$43 + 36 = \square$$

$$55 + 43 = \square$$



Help Ben to complete
the subtraction
sums on his tablet.



$$89 - 56 = \square$$

$$65 - 34 = \square$$

$$33 - 22 = \square$$

Solve the problems:



1. Lisa buys herself 3 new dolls. Each doll costs R90. How much change will she get for R400?

Workspace:


1. Dave saves R6.50 every day. How much money did he save after 4 days?

Workspace:

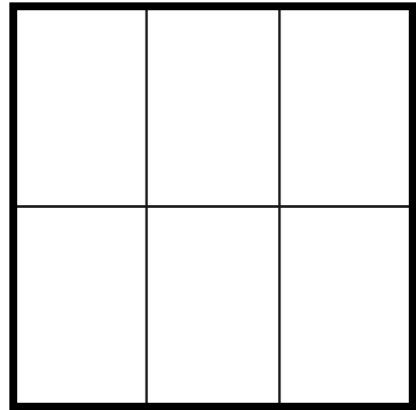
2. If one toffee costs 25c, how much will 15 toffees cost?

Workspace:

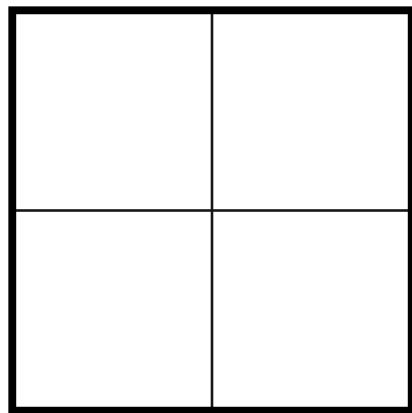

Color in 2
thirds.



Color in 4
sixths.



Color in 2 quarters on each one.



Color in 3 fifths on each one.

