


Help Snoopy to count the amount of money.

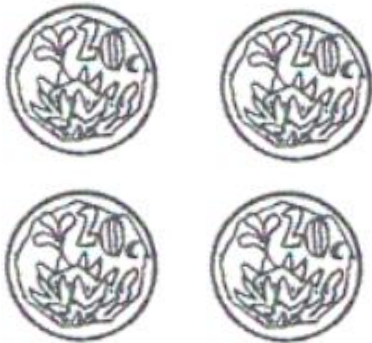
Name: _____ Date: _____



=



=



=



=



=

Count the amount of each coin and write the answer in the blocks.





MONEY

Match the coins with their names



One rand

Two rand

Five cent

Five rand

Twenty cent

- Circle the coin which is the most.



- Circle the coin which is the least.



MONEY



Match the notes with their name



Ten rand	Fifty rand	Two hundred rand	Hundred rand	Twenty rand
-------------	---------------	------------------------	-----------------	----------------

- Circle the note which is the most.



- Circle the note which is the least.




Money

5c, 10c and 20c

Color in the correct amount:

1. Color in 20 cent



2. Color in 30 cent




3. Color in 15 cent



4. Color in 50 cent



5. Color in 15 cent



Money

R1, R2 and R5

Color in the correct amount:

1. Color in 10 rand



2. Color in 6 rand



3. Color in 15 rand




Money

Color in the correct amount:

1. Color R/5.50 in:



2. Color R/6.20



3. Color R/2.40 in



Count the amount of money and write the answer in the block.



=



=



=



=



=

Money - Word problems

1. Jan buys himself 4 sweets. Each sweet costs 20c. How much did he pay for the sweets?

2. David buys himself a lollipop each day of the week for R2. There is 7 days in a week. How much did he spend by Sunday on the lollipops?

3. Susan saves R5 every day. How much money did she save by Friday?



Money

Look at the money in the first column and decide which combinations of coins you should use to get the amount of money. The first one is done for you.

