

GRADE 4 Social Science: Geography – TERM 4

Name and surname: _____

Total: 50

Date: _____

Time: 1 hour

INSTRUCTIONS

1. Read the questions carefully.
 2. Answer all the questions.
 3. Write neatly.
-

QUESTION 1

Define the following words:

1.1. Village (1)

1.2. Wastewater (1)

1.3. Map symbol (1)

1.4. Water pollution (1)

QUESTION 2

Is the following statements true or false?

2.1. When we purify water, we add dirty and harmful substances. _____ (1)

2.2. Plants don't need water for growth and to absorb nutrients from the soil. (1)

2.3. A borehole is a hole which is drilled into the earth to provide us with water. (1)


QUESTION 3

Match Column B with Column A by writing only the letter. (5)

Column A	Answer	Column B
1. Rivers		A. Areas where the land does not drain well. The ground in is saturated, or full of water. Often the ground is covered with shallow water.
2. Lakes		B. A channel of water flowing over the earth.
3. Wetlands		C. A natural flowing, moving stream of water.
4. Underground water		D. Bodies of water surrounded on all sides by land. Still standing water.
5. Streams		E. Water which comes from underground.

QUESTION 4

Look at the following pictures and describe how water is used by humans, plants and farming. Give 2 examples for each picture. (6)



1. _____

2. _____



1. _____

2. _____



1. _____

2. _____

QUESTION 5

Answer the questions below:

5.1. What is the difference between fresh water and salt water? (2)

5.2. Describe the 5 stages of the water cycle. (5)

5.3. Name two ways to store water. (2)

QUESTION 6

Describe four ways how people pollute water through their everyday practices. (4)

QUESTION 7










Draw a picture to show how water flows from the beginning till the end so that we can receive it in our homes. Your drawing must have titles/headings. Then write an explanation for your picture for 4 points. (9)



QUESTION 8

Use the grid below to answer the questions.

(7)

	1.	2.	3.	4.
A.				
B.				
C.				
D.				

8.1. Identify the names of the objects in the following grid squares:

(2)

a. B1: _____

b. C4: _____

8.2. Give the grid squares of the following objects: (3)

- a. Children: _____ b. Bench: _____
b. The pond: _____

8.3. Use the 4 cardinal points of a compass.

- a) If you are going from A1 to D4, in which direction are you going?
_____ (1)
- b) If you are going from the park to the school bus, in which direction
are you going? _____ (1)

QUESTION 9

Complete the following table by filling in the correct answers. (6 x $\frac{1}{2}$ = 3)

Name of food	Plant or animal	Processed or unprocessed	Which product or animal is this product made from?
1. Apples			
2. Bread			

Total: ___/50