

**GRADE 4 Life Skills – TERM 4**

**Name and surname:** \_\_\_\_\_

**Total: 30**

**Date:** \_\_\_\_\_

**Time: 45 minutes**

**INSTRUCTIONS**

1. Read the questions carefully.
2. Answer all the questions.
3. Write neatly.

---

**QUESTION 1**

Match column B with column A. Write only the letter. (5)

<b>Column A</b>	<b>Answer</b>	<b>Column B</b>
1. Air pollution		A. It is a virus. This virus causes an illness called AIDS.
2. Arbor day		B. Traffic sign which instructs motor vehicles to stop.
3. Water pollution		C. Occurs when gases, dust, smoke, or odor get into the air and make it unclean. It is unsafe for humans and animals to breathe and for plants to live with.
4. HIV		D. The contamination of water bodies like aquifers, ground water, fresh water, rivers, sea and oceans.
5. Stop		E. A holiday in which individuals and groups are encouraged to plant trees.

---

**QUESTION 2**

Is the following statements true or false? If false correct the statement. (5)

2.1. Germs live in places that are not regularly and properly cleaned. (1)

---

2.2. You only need to brush your teeth once a day. (1)

---

2.3. Sweets, fizzy cold drinks and chips are bad for your teeth. (1)

---

2.4. Your body doesn't need healthy food. (1)

---

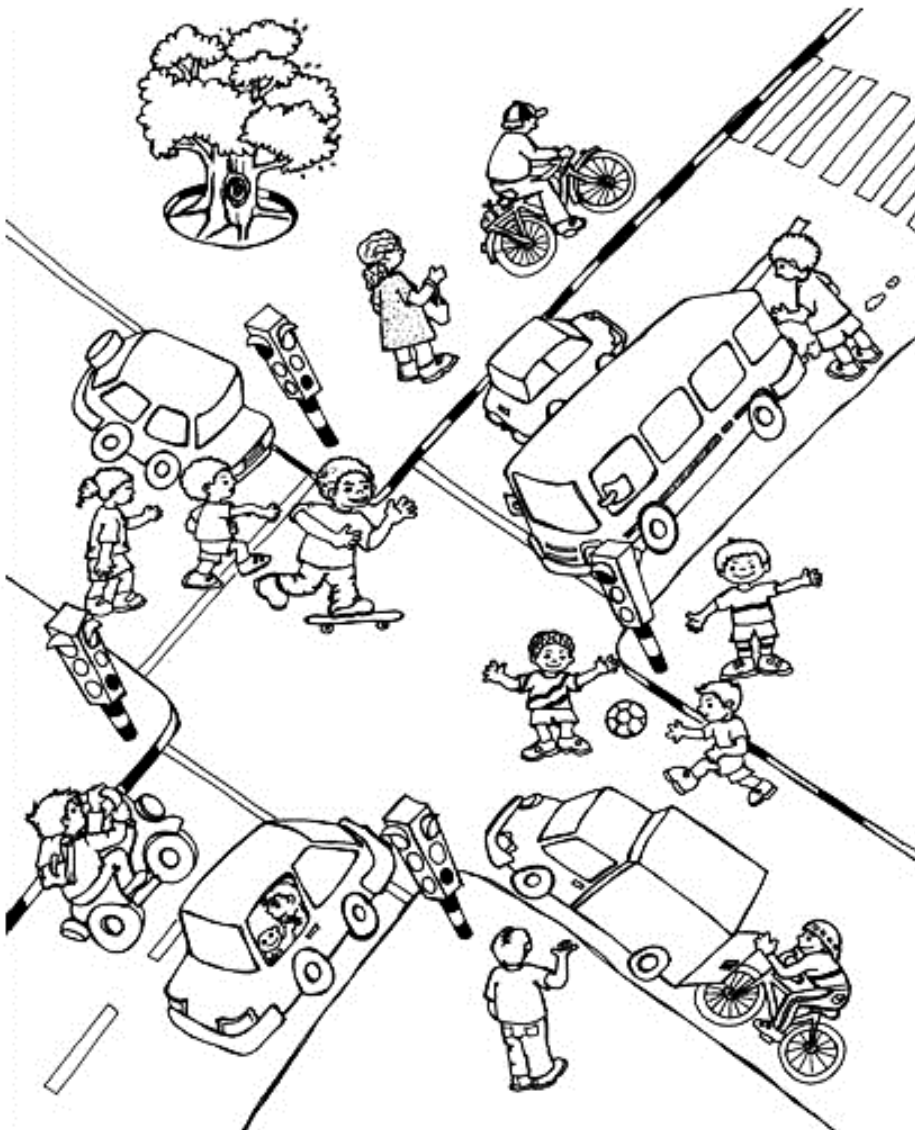
2.5. You should drink lots of water every day. (1)

---

---

### QUESTION 3

Look at the picture and write down 5 traffic rules. (5)



1. \_\_\_\_\_  
\_\_\_\_\_
2. \_\_\_\_\_  
\_\_\_\_\_
3. \_\_\_\_\_  
\_\_\_\_\_
4. \_\_\_\_\_  
\_\_\_\_\_
5. \_\_\_\_\_  
\_\_\_\_\_

### QUESTION 4

Complete the following sentences by using the words in the word bank. (4 x  $\frac{1}{2}$  = 3)

bully	anxious	love
hate	relaxed	
	group work	

- 4.1. \_\_\_\_\_ is an emotion which makes us feel happy.
- 4.2. When a person calls another person names, spread nasty rumors or hurt them by kicking, hitting, pushing or kicking them, they are called a \_\_\_\_\_.
- 4.3. When you feel afraid or nervous you are \_\_\_\_\_,
- 4.4. When you work together and help each other it is called \_\_\_\_\_.
- 

### QUESTION 5

Answer the following questions:

- 5.1. For what do the following abbreviations stand for? (2)
- a) HIV - \_\_\_\_\_
- b) AIDS - \_\_\_\_\_

- 5.2. How is HIV spread? (2 x  $\frac{1}{2}$  = 1)

---

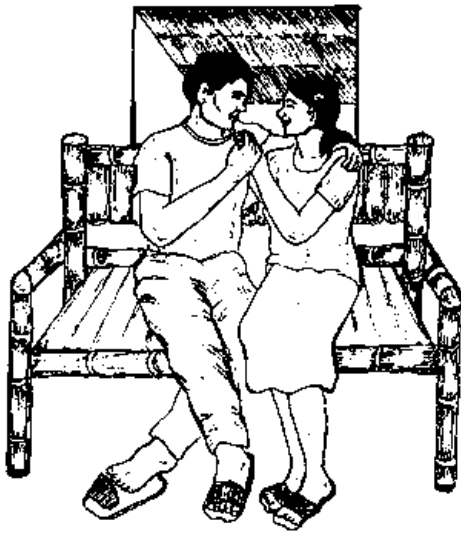
---

---

---

5.3. Look at the pictures and write 3 ways how HIV is not spread.

(3)



---

---

---

---

---

---

### QUESTION 6

Look at the pictures and write what type of pollution you see on the line.

(3)



---

---



**QUESTION 7**


Look at the symbols of each religion below. Write the letter of the symbol next to the correct religion. (6 x  $\frac{1}{2}$  = 3)




a.



b.



c.



d.



e.

Religion	Symbol
1. Christian	
2. Hinduism	
3. Buddhism	
4. Islam	
5. Judaism	

**Total: \_\_\_\_\_/30**