


D O B B E L S T E E N
S O M M E



Gooi jou dobbelsteen om die PLUS somme hieronder te voltooi.


$$\square + \square = \square$$

$$\square + \square = \square$$


$$\square + \square = \square$$

$$\square + \square = \square$$

$$\square + \square = \square$$



D O B B E L S T E E N
S O M M E



Gooi jou dobbelsteen om die MAAL somme hieronder te voltooi.


$$\square \times \square = \square$$

$$\square \times \square = \square$$

$$\square \times \square = \square$$

$$\square \times \square = \square$$

$$\square \times \square = \square$$



D O B B E L S T E E N
S O M M E




Gooi jou dobbelsteen om die MAAL en PLUS somme hieronder te voltooi.

$$\square \times \square + \square = \square$$

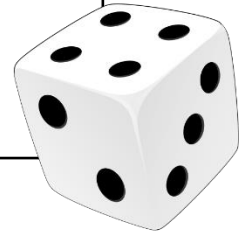
$$\square \times \square + \square = \square$$

$$\square \times \square + \square = \square$$

$$\square \times \square + \square = \square$$



D O B B E L S T E E N
S O M M E



Gooi jou dobbelsteen om die MAAL somme hieronder te voltooi.

$$\boxed{5} \times \boxed{} = \boxed{}$$

$$\boxed{} \times \boxed{4} = \boxed{}$$

$$\boxed{6} \times \boxed{} = \boxed{}$$

$$\boxed{} \times \boxed{10} = \boxed{}$$

$$\boxed{3} \times \boxed{} = \boxed{}$$

