


D O B B E L S T E E N

S O M M E



Gooi jou dobbelsteen om die PLUS somme hieronder te voltooi.


$$\square + \square = \square$$

$$\square + \square = \square$$


$$\square + \square = \square$$

$$\square + \square = \square$$

$$\square + \square = \square$$



D O B B E L S T E E N
S O M M E



Gooi jou dobbelsteen om die MINUS somme hieronder te voltooi.


$$10 - \square = \square$$

$$26 - \square = \square$$

$$18 - \square = \square$$

$$23 - \square = \square$$

$$20 - \square = \square$$



D O B B E L S T E E N
S O M M E



Gooi jou dobbelsteen 3 keer om die PLUS somme hieronder te voltooi.

$$\square + \square + \square = \square$$

$$\square + \square + \square = \square$$

$$\square + \square + \square = \square$$

$$\square + \square + \square = \square$$

